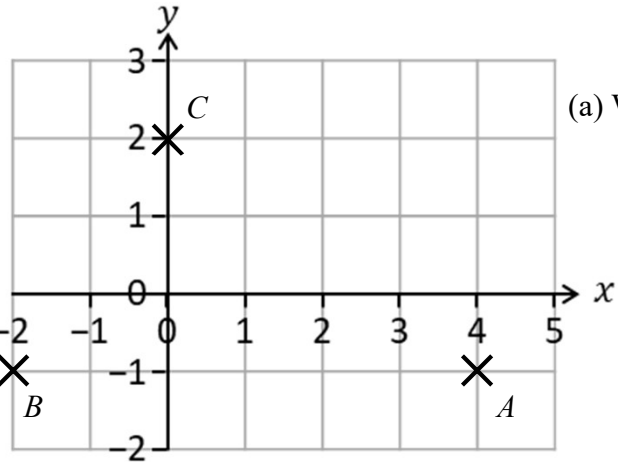




1 The diagram shows points A , B and C on a square grid.



(a) Write down the coordinates of B .

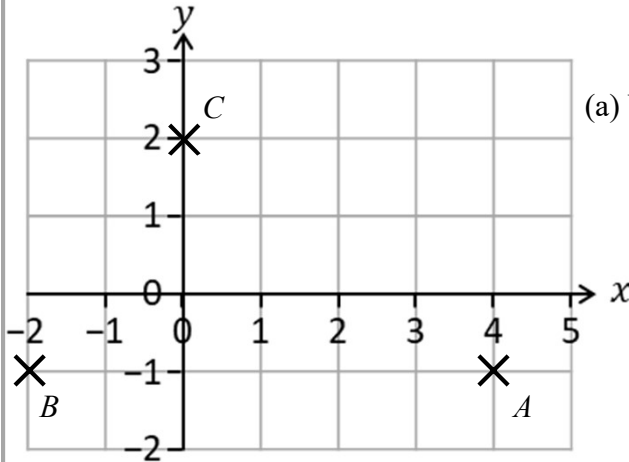
(..... ,)
(1)

(c) On the grid, mark with a cross (X) a possible point so that $ABCD$ is a trapezium. Label this point D .

(1)



1 The diagram shows points A , B and C on a square grid.



(a) Write down the coordinates of B .

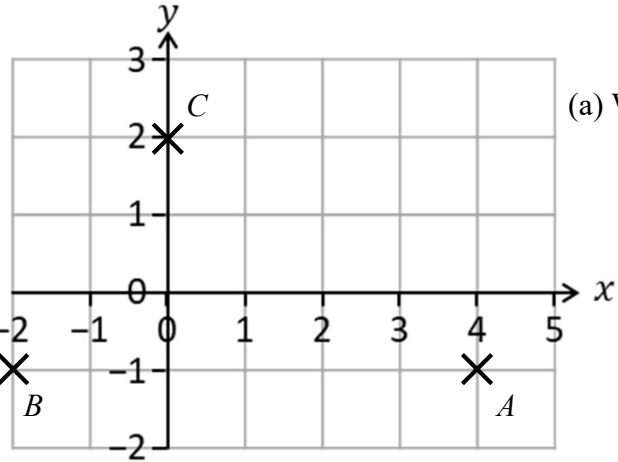
(..... ,)
(1)

(c) On the grid, mark with a cross (X) a possible point so that $ABCD$ is a trapezium. Label this point D .

(1)



1 The diagram shows points A , B and C on a square grid.



(a) Write down the coordinates of B .

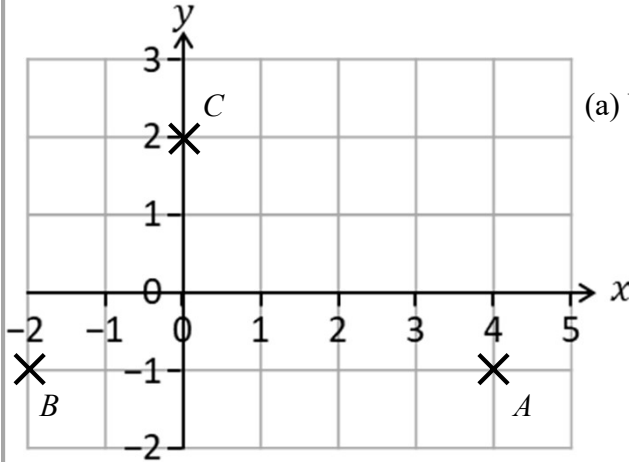
(..... ,)
(1)

(c) On the grid, mark with a cross (X) a possible point so that $ABCD$ is a trapezium. Label this point D .

(1)



1 The diagram shows points A , B and C on a square grid.



(a) Write down the coordinates of B .

(..... ,)
(1)

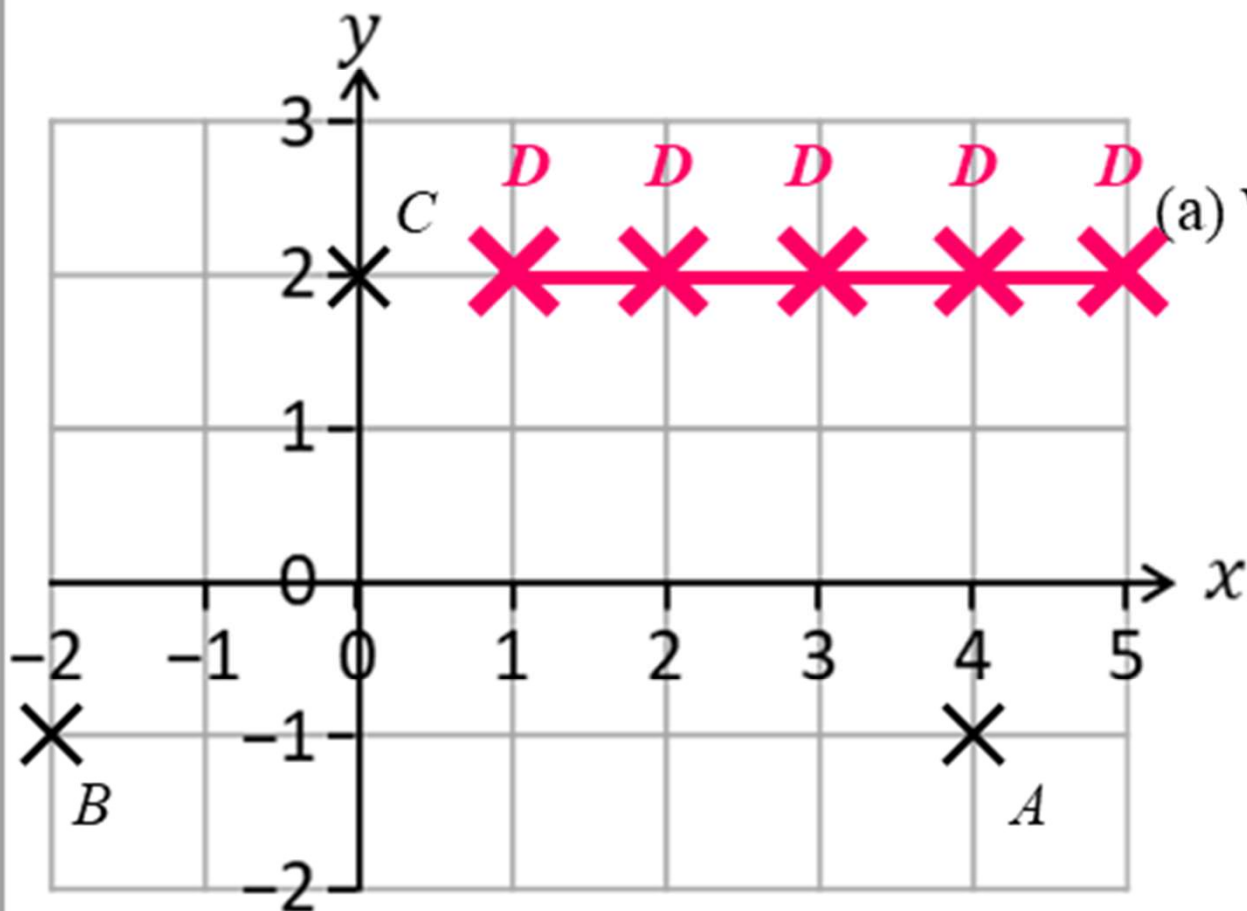
(c) On the grid, mark with a cross (X) a possible point so that $ABCD$ is a trapezium. Label this point D .

(1)

IGCSE — Edexcel Foundation: June 2018 Paper 2, Q4



1 The diagram shows points A , B and C on a square grid.



(a) Write down the coordinates of B .

(-2 , -1)
..... (1)

(c) On the grid, mark with a cross (X) a possible point so that $ABCD$ is a trapezium. Label this point D .

(1)