



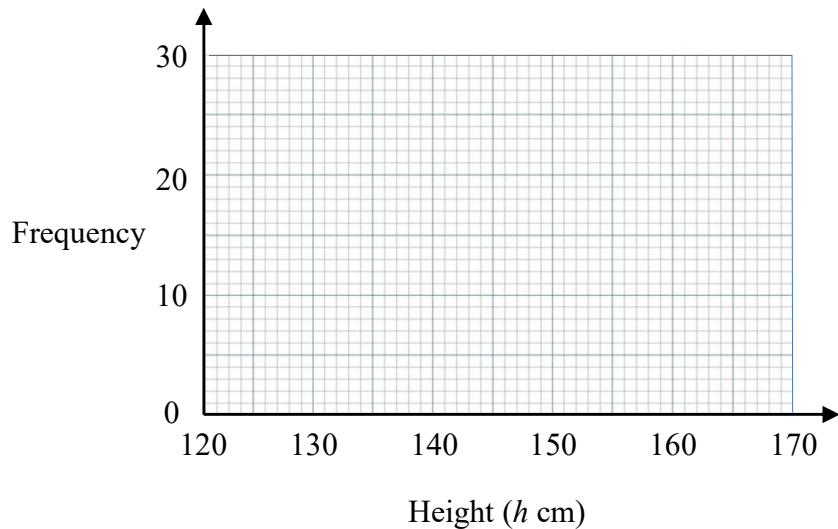
1 The table shows information about the heights of 60 people.

Height (h cm)	Frequency
$120 < h \leq 130$	3
$130 < h \leq 140$	17
$140 < h \leq 150$	22
$150 < h \leq 160$	10
$160 < h \leq 170$	8

(a) Find the class interval that contains the median.

.....
(1)

(b) Draw a frequency polygon for the information in the table.



(2)

(Total for Question 1 is 3 marks)



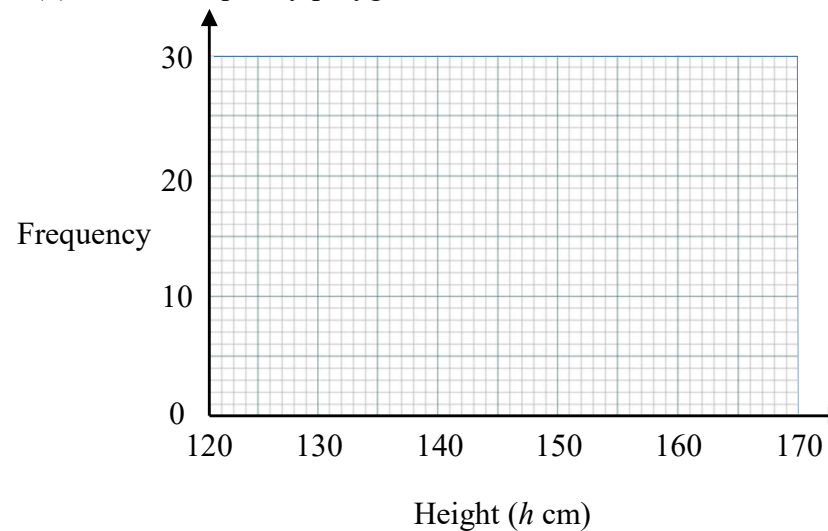
1 The table shows information about the heights of 60 people.

Height (h cm)	Frequency
$120 < h \leq 130$	3
$130 < h \leq 140$	17
$140 < h \leq 150$	22
$150 < h \leq 160$	10
$160 < h \leq 170$	8

(a) Find the class interval that contains the median.

.....
(1)

(b) Draw a frequency polygon for the information in the table.



(2)

(Total for Question 1 is 3 marks)



1 The table shows information about the heights of 60 people.

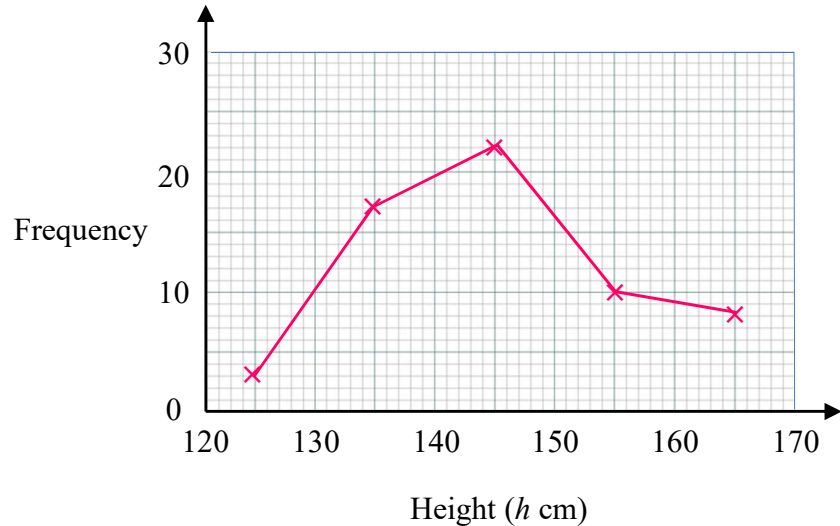
Height (h cm)	Frequency
$120 < h \leq 130$	3
$130 < h \leq 140$	17
$140 < h \leq 150$	22
$150 < h \leq 160$	10
$160 < h \leq 170$	8

3
20
42
52
60

(a) Find the class interval that contains the median.

Where is the 30th piece of data ? $140 < h \leq 150$
(1)

(b) Draw a frequency polygon for the information in the table.



(2)

(Total for Question 1 is 3 marks)